


Name: \_\_\_\_\_

# Fun with Addition!

Use the number line to find the missing number

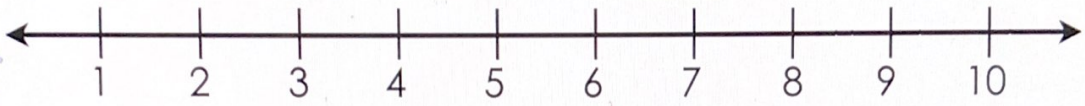
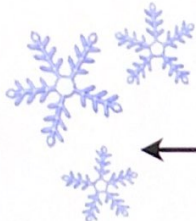


	H	T	O
	8	3	3
+	1	3	5
<hr/>			
	9	6	8

3 plus what equals 8?  $3 + 5 = 8$

3 plus what equals 6?  $3 + 3 = 6$

8 plus what equals 9?  $8 + 1 = 9$



a)  $\downarrow$  start

	H	T	O
	5	4	1
+			
<hr/>			
	9	5	4

d)  $\downarrow$

	H	T	O
	7	0	2
+			
<hr/>			
	8	5	3

g)  $\downarrow$

	H	T	O
	2	2	8
+			
<hr/>			
	6	9	9

b)  $\downarrow$

	H	T	O
	4	5	1
+			
<hr/>			
	8	7	7

e)  $\downarrow$

	H	T	O
	2	0	1
+			
<hr/>			
	7	9	2

h)  $\downarrow$

	H	T	O
	3	3	3
+			
<hr/>			
	5	7	6

c)  $\downarrow$

	H	T	O
	5	3	2
+			
<hr/>			
	7	8	9

f)  $\downarrow$

	H	T	O
	2	3	1
+			
<hr/>			
	6	9	3

i)  $\downarrow$

	H	T	O
	4	7	9
+			
<hr/>			
	7	8	9