


Name \_\_\_\_\_


Date \_\_\_\_\_




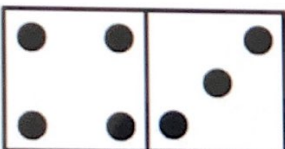
# DOMINO ADDITION SHEET 4


Count the number of dots on each domino and fill in the total.


1)   
 \_\_\_\_\_ + \_\_\_\_\_ = \_\_\_\_\_


2)   
 \_\_\_\_\_ + \_\_\_\_\_ = \_\_\_\_\_


3)   
 \_\_\_\_\_ + \_\_\_\_\_ = \_\_\_\_\_


4)   
 \_\_\_\_\_ + \_\_\_\_\_ = \_\_\_\_\_


5)   
 \_\_\_\_\_ + \_\_\_\_\_ = \_\_\_\_\_


6)   
 \_\_\_\_\_ + \_\_\_\_\_ = \_\_\_\_\_


7)   
 \_\_\_\_\_ + \_\_\_\_\_ = \_\_\_\_\_

8)   
 \_\_\_\_\_ + \_\_\_\_\_ = \_\_\_\_\_

9)   
 \_\_\_\_\_ + \_\_\_\_\_ = \_\_\_\_\_

10)   
 \_\_\_\_\_ + \_\_\_\_\_ = \_\_\_\_\_

11)   
 \_\_\_\_\_ + \_\_\_\_\_ = \_\_\_\_\_

12)   
 \_\_\_\_\_ + \_\_\_\_\_ = \_\_\_\_\_

Shade the dominoes which have a total of 10.

